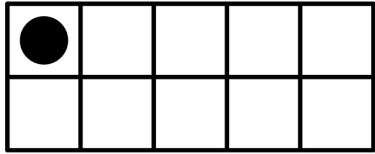
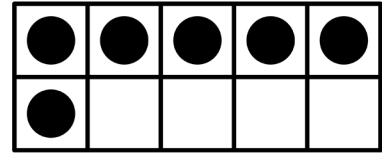


SUBTRACTION

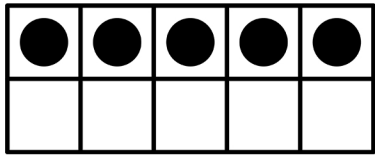
Name: _____




$$\underline{7} - \underline{\quad} = \underline{6}$$




$$\underline{9} - \underline{\quad} = \underline{3}$$



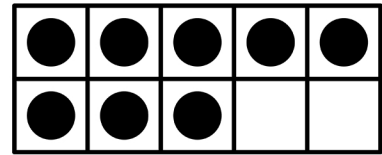
$$\underline{8} - \underline{\quad} = \underline{3}$$



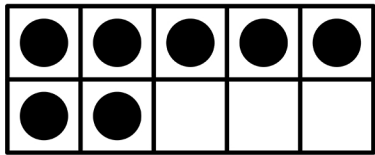
$$\underline{10} - \underline{\quad} = \underline{0}$$



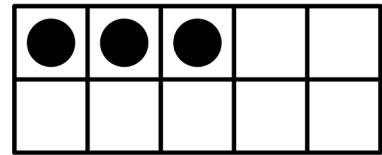
$$\underline{12} - \underline{\quad} = \underline{3}$$



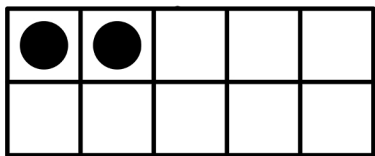
$$\underline{9} - \underline{\quad} = \underline{1}$$



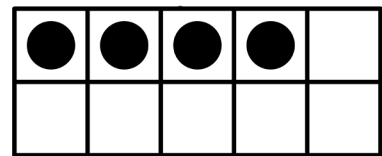
$$\underline{10} - \underline{\quad} = \underline{3}$$



$$\underline{5} - \underline{\quad} = \underline{2}$$



$$\underline{5} - \underline{\quad} = \underline{3}$$



$$\underline{6} - \underline{\quad} = \underline{2}$$