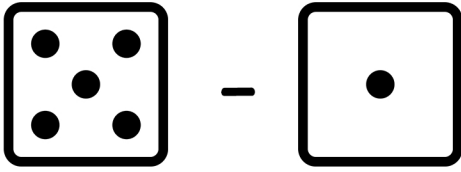
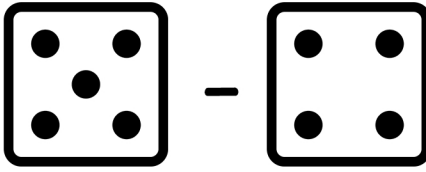


# SUBTRACTION

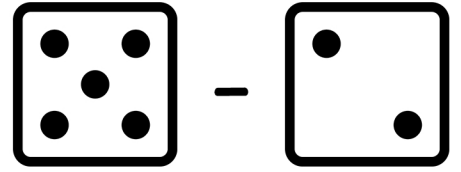
Name: \_\_\_\_\_



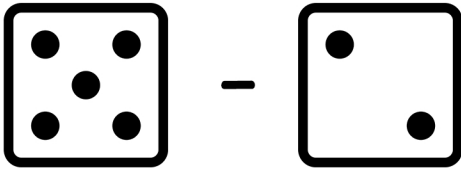
$$5 - 1 = \square$$



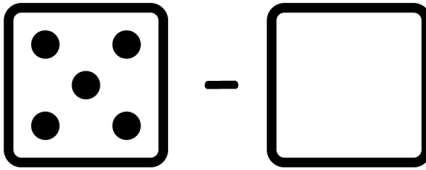
$$5 - 4 = \square$$



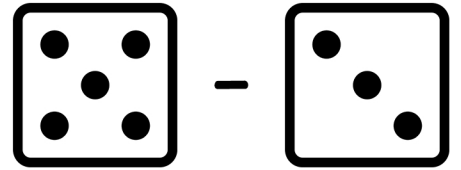
$$5 - 2 = \square$$



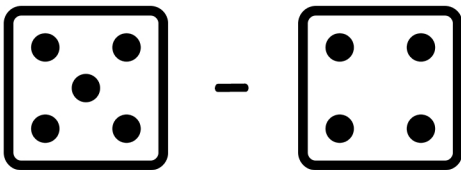
$$5 - 2 = \square$$



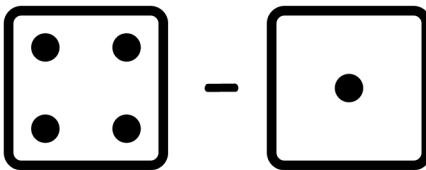
$$5 - 0 = \square$$



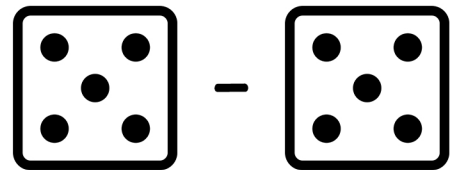
$$5 - 3 = \square$$



$$5 - 4 = \square$$



$$5 - 1 = \square$$



$$5 - 5 = \square$$