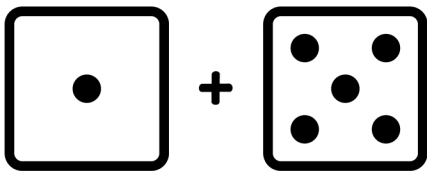
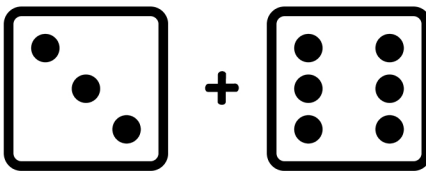


ADDITION

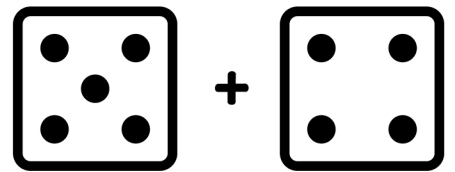
Name: _____



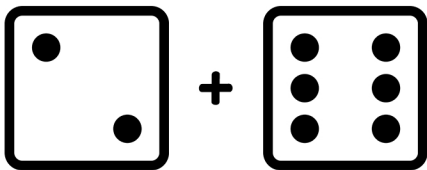
$$1 + 4 = \square$$



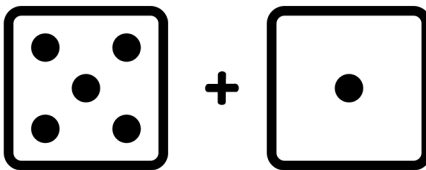
$$3 + 4 = \square$$



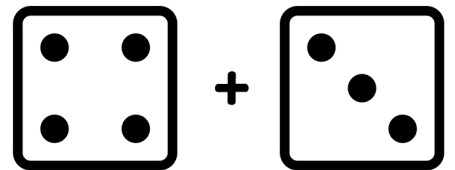
$$2 + 6 = \square$$



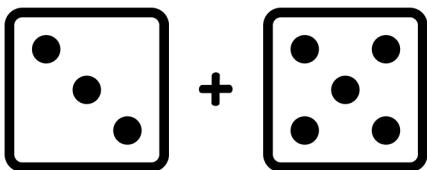
$$2 + 4 = \square$$



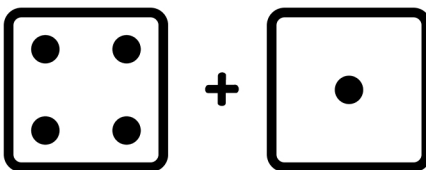
$$4 + 1 = \square$$



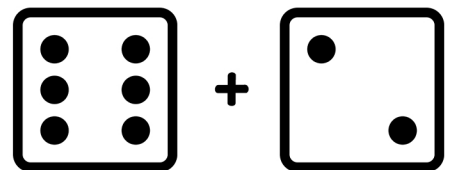
$$4 + 3 = \square$$



$$3 + 4 = \square$$



$$4 + 1 = \square$$



$$6 + 3 = \square$$